

MONDAY

1. Which is the time?



2. $\square + 7 = 10$

3. $\$5.00 + \square = \9.00

4. $40 \div 10 = \square$

5. Which direction is this?

- ☐ clockwise
☐ anticlockwise



6. $3^2 = 3 \times 3 = \square$

7. Round 94 to the nearest ten.

8. How many days are in a leap year?

9. Would you buy flour by the kilogram (kg) or the kilometre (km)?

10. $42 - 10 = \square$

11. Share \$15.00 among 3 children.

\$ \square each

12. 60, 55, 50, 45,

13. How many weeks are in a year?

14. Double 14.

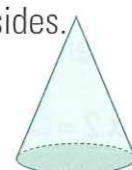
15. How many days are in the month of August?

16. $17 - 9 = \square$

17. If a mobile phone call costs 50c for 30 seconds. What is the cost for a minute?

18. A pentagon has \square sides.

19. Name this 3-D shape.



20. A square has \square corners.



TUESDAY

1. What is the time?



2. $3 + 3 + 3 + 3 + 3 + 3 = \square$

so $\square \div 3 = 6$

3. $6 + \square = 9$

4. Round 12 to the nearest ten.

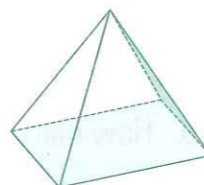
5. $2 \times 2 = \square$

6. If you count 16 wheels in a carpark how many cars are there?

7. $\square + 9 = 11$

8. Name this 3-D shape.

s
p



9. An octagon has \square sides.

10. $4^2 = 4 \times 4 = \square$

11. Measure the line AB. \square cm



12. Which months are in autumn?

- ☐ January, February, March
☐ March, April, May

13. $8 + 9 = \square$

14. $10 - 3 = \square$

15. Is this line horizontal or vertical?



16. Write two hundred and thirty-two as a numeral.

17. $3 \times 3 = \square$

18. 3, 6, 9, 12,

19. 1 cm = \square mm

20. $5 + 5 = \square$



WEDNESDAY

1. What is the time?



2. $2 + 2 + 2 + 2 + 2 + 2 = \square$

so $\square \div 2 = 6$

3. How many months are in a year?

4. $9 \times 0 = \square$

5. $43 + 10 = \square$

6. At sunset will it be am or pm?

7. $\$5.00 + \$1.50 = \square$

8. $500 + 200 = \square$

9. If you share 25c among five Year 4 girls how much will each girl get?

c each

10. $14 \div 7 = \square$

11. $8 \times 1 = \square$

12. If you count 24 wheels in a carpark how many cars will there be?

13. $2 + \square = 8$

14. Is this a pentagon, octagon or hexagon?



15. Which direction is this?

- ☐ clockwise
☐ anticlockwise



16. 1 minute = \square seconds

17. 10 mm = \square cm

18. In 258, what is the meaning of the 5?

- ☐ 500 ☐ 50 ☐ 5

19. Is this a hexagon?

- ☐ yes ☐ no



20. 11, 9, 7, 5,



THURSDAY

1. What is the time?



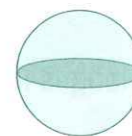
2. $15 - 9 = \square$

3. $\$10.00 - \$4.50 = \square$

4. 3, 5, 7, 9,

5. $10 \div \square = 14$

6. Name this 3-D shape.



s

7. $8 + 8 + 8 + 8 = \square$

so $\square \div 8 = 4$

8. $6 \times 3 = \square$

9. There are 32 wheels in a rack. How many cars will they fit onto?

10. If a mobile text message costs 25c each how much would 4 text messages cost?

11. $\$1.00 - 90c = \square$

12. Round 101 to the nearest ten.

13. $\$3.00 + \$2.40 = \square$

14. How many weeks are in a fortnight?

15. In 209, what is the meaning of the 2?

- ☐ 200 ☐ 20 ☐ 2

16. $100 + 70 + 5 = \square$

17. 1 m = \square cm

18. Is 8 am morning or afternoon?

19. $27 + 10 = \square$

20. A quadrilateral has \square sides.

